



Cambridge O Level

CANDIDATE
NAMECENTRE
NUMBER

--	--	--	--	--

CANDIDATE
NUMBER

--	--	--	--

BIOLOGY

5090/31

Paper 3 Practical Test

October/November 2025

1 hour 30 minutes

You must answer on the question paper.

You will need: The materials and apparatus listed in the confidential instructions

INSTRUCTIONS

- Answer **all** questions.
- Use a black or dark blue pen. You may use an HB pencil for any diagrams or graphs.
- Write your name, centre number and candidate number in the boxes at the top of the page.
- Write your answer to each question in the space provided.
- Do **not** use an erasable pen or correction fluid.
- Do **not** write on any bar codes.
- You may use a calculator.
- You should show all your working and use appropriate units.

INFORMATION

- The total mark for this paper is 40.
- The number of marks for each question or part question is shown in brackets [].

For Examiner's Use

1	
2	
3	
Total	

This document has **12** pages. Any blank pages are indicated.

In order to plan the best use of your time, read through all the questions on this paper carefully before starting work.

- 1 Apple juice is made by cutting up and crushing apples. When apple tissue is cut up and crushed, it can become a darker colour and go brown.

You are going to investigate the effect of vitamin C on the colour change when apple is cut up and crushed.

You are provided with some apple tissue, 20 cm^3 of vitamin C solution, 20 cm^3 of distilled water, a glass rod and three large test-tubes.

Read through the following procedure carefully and decide how to label your test-tubes.

Do not carry out the procedure yet.

- Label a large test-tube and use a clean syringe to add 5 cm^3 of vitamin C solution.
 - Label a second large test-tube and use a clean syringe to add 5 cm^3 of distilled water.
 - Label a third large test-tube and do **not** add any liquid.
 - Cut three cubes of apple each $1\text{ cm} \times 1\text{ cm} \times 1\text{ cm}$. Ensure that each surface of the cubes is freshly cut. Do **not** include any skin or core.
 - Cut each cube into many small pieces. Take care to keep the pieces from each cube separate.
 - Add the pieces of one cube to the test-tube containing vitamin C solution.
 - Add the pieces of the second cube to the test-tube containing distilled water.
 - Add the pieces of the third cube to the test-tube with **no** added liquid.
 - Use a glass rod to gently crush the pieces of apple in the bottom of each test-tube.
 - Clean the glass rod in the rinsing water between using it in each test-tube.
- (a) When you have finished crushing the apple, observe the colour of the crushed apple in each test-tube.

(i) In Table 1.1, record your observations of the crushed apple at 0 minutes. [1]

(ii) Start timing.

Record the start time. [1]



- (iii) Observe the colour of the crushed apple in each test-tube at 5, 10 and 15 minutes and record your observations in Table 1.1.

Table 1.1

time /minutes	colour of crushed apple in each test-tube		
	vitamin C	distilled water	no added liquid
0			
5			
10			
15			

[4]

- (iv) Using your observations in Table 1.1, state what can be concluded about the effect of vitamin C on the colour change when apple is cut up and crushed.

.....
 [1]

- (v) Using your observations in Table 1.1, state what can be concluded about the effect of distilled water on the colour change when apple is cut up and crushed.

.....

 [2]

- (vi) You may have found difficulty in carrying out some of the instructions consistently which may have resulted in sources of error.

State **one** possible source of error and suggest how it could be overcome.

.....

 [2]



- (b) (i) Use the universal indicator paper that has been provided to test and record the pH of the distilled water and the pH of the vitamin C solution.

distilled water pH

vitamin C solution pH

[2]

- (ii) When apple tissue is cut up and crushed, an enzyme comes into contact with oxygen in the air. In the presence of oxygen, the enzyme catalyses the reaction of a colourless molecule in the cells of the apple tissue to cause the change in colour.

Suggest how this might explain the effect of:

distilled water

.....

.....

vitamin C.

.....

.....

[2]

[Total: 15]





- 2 Yeast is used to produce bread. Flour is mixed with water and yeast to produce dough. The yeast breaks down starch in the flour to produce sugar. The yeast uses the sugar for respiration, giving off bubbles of carbon dioxide. The bubbles of carbon dioxide are trapped in the dough, making it increase in volume before it is baked.

- (a) Some students tested the effect of yeast in four doughs, each made from a different type of flour – wheat, rye, buckwheat and maize. The effect of the yeast in the dough was evaluated by measuring how much the dough increased in volume.

The same mass of each type of flour was mixed with the same volume of water and the same mass of yeast to form a dough. Four 100 cm³ measuring cylinders were labelled and dough was added to each. The volume of the dough in each of the cylinders was measured and recorded at 15-minute intervals. Some of the results are shown in Table 2.1.

- (i) Fig. 2.1 shows the measuring cylinder with dough made from wheat flour after 30 minutes. Record the volume of the dough in Table 2.1. [1]

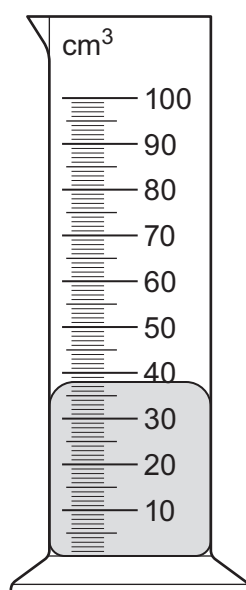


Fig. 2.1


- (ii) Complete Table 2.1 by calculating the total increase in volume of each dough after 45 minutes.

Table 2.1

time / minutes	volume of dough in measuring cylinder / cm ³			
	wheat flour	rye flour	buckwheat flour	maize flour
0	20	21	21	20
15	24	23	21	21
30		27	22	22
45	45	32	23	22
total increase in volume after 45 minutes	25			



- (iii) On the grid draw a bar chart to show the total increase in volume of the four doughs after 45 minutes.



[4]

The students wanted to know why the effect of yeast in the four doughs varied.

Table 2.2 shows some of the biological molecules in the four flours.

Table 2.2

biological molecule	mass/g per 100 g flour			
	wheat flour	rye flour	buckwheat flour	maize flour
starch	54.5	54.1	59.0	74.0
gluten (a protein)	8.9	3.1	0.0	0.0
fibre	10.6	13.7	10.4	4.3

- (iv) Using Table 2.2, your bar chart and the information about the process of bread production, suggest and explain how these biological molecules affect the total increase in volume of bread dough.

.....

.....

.....

.....

.....

.....

..... [3]





(b) Describe how you would show that each of the four flours contained starch.

..... [2]

(c) The students made more dough from wheat flour, yeast and water.

Using this dough, plan an investigation based on the method in **2(a)** to determine the effect of temperature on the increase in volume of dough at temperatures between 20 °C and 80 °C.

Predict your expected results.

[illegible]

expected results

.....

.....

.....

[6]

[Total: 18]





BLANK PAGE



- 3 A student investigated a plant that had some stems with flowers and some stems with **no** flowers. The student picked one leaf from a stem with flowers and one leaf from a stem with **no** flowers. Fig. 3.1 shows the two leaves.




Fig. 3.1

- (a) (i) Complete Table 3.1 to compare the size and shape of the leaves.

Table 3.1

feature of leaf	leaf from stem with flowers	leaf from stem with no flowers
size		
shape		

[2]

- (ii) Suggest what the student needs to do to be certain that the two leaves they picked are representative of the leaves on the two types of stem.

.....

.....

.....

..... [2]



- (b) In the space below, make a large drawing of the leaf from the stem with **no** flowers as it appears in Fig. 3.1.

[3]

[Total: 7]





Permission to reproduce items where third-party owned material protected by copyright is included has been sought and cleared where possible. Every reasonable effort has been made by the publisher (UCLES) to trace copyright holders, but if any items requiring clearance have unwittingly been included, the publisher will be pleased to make amends at the earliest possible opportunity.

To avoid the issue of disclosure of answer-related information to candidates, all copyright acknowledgements are reproduced online in the Cambridge Assessment International Education Copyright Acknowledgements Booklet. This is produced for each series of examinations and is freely available to download at www.cambridgeinternational.org after the live examination series.

Cambridge Assessment International Education is part of Cambridge Assessment. Cambridge Assessment is the brand name of the University of Cambridge Local Examinations Syndicate (UCLES), which is a department of the University of Cambridge.

